





NAME \_\_\_\_\_ DATE \_\_\_\_\_



## REPRESENTING COINS

Coins, Its quantities in value equal to more / less comparing with other coins.

- 1) Rachel has 13 cents in her pocket. She has one nickel and some other coins. Draw coins to show two different ways she could have 13 cents with the coins she has in her pocket.



- 2) Jackson has 9 cents in his pocket. Draw coins to show two different ways he could have 9 cents with the coins he has in his pocket.



- 3) Lee has 14 cents in his pocket. One of his coins is dime. Draw coins to show two different ways he could have 17 cents with the coins he has in his pocket.

